


Name: \_\_\_\_\_

# Decimals: Tenths

Write the decimal and the fraction shown by each square.

a.



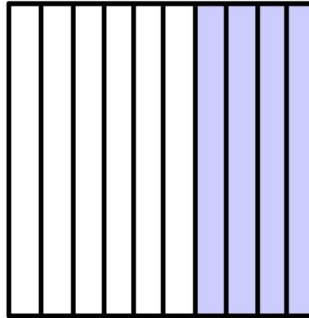
\_\_\_\_\_

b.




\_\_\_\_\_

c.



\_\_\_\_\_

d.



\_\_\_\_\_

e.




\_\_\_\_\_

f.




\_\_\_\_\_

g.



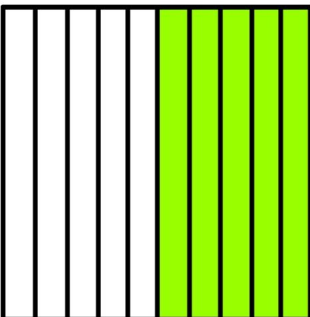
\_\_\_\_\_

h.




\_\_\_\_\_

i.




\_\_\_\_\_

j.



\_\_\_\_\_

k.




\_\_\_\_\_

Name: \_\_\_\_\_

# Decimals: Tenths - ANSWER KEY

Write the decimal and the fraction shown by each square.

a.



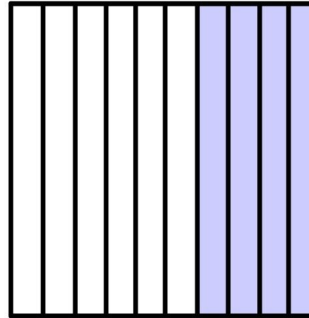
0.9      9/10

b.




0.1      1/10

c.



0.4      4/10

d.



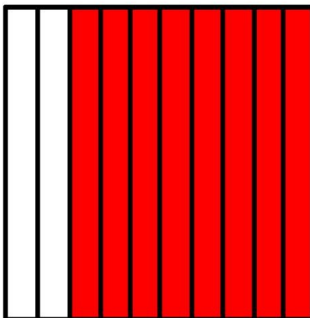
0.6      6/10

e.




0.3      3/10

f.




0.8      8/10

g.



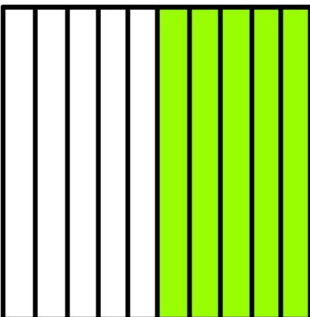
0.0      0/10

h.




0.2      2/10

i.



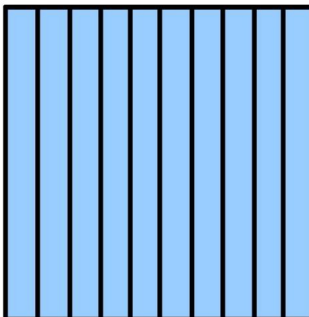
0.5      5/10

j.



0.7      7/10

k.



1.0      10/10